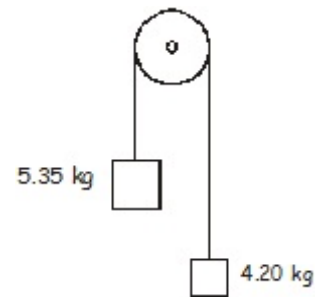


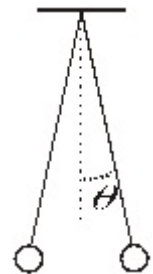
Name: \_\_\_\_\_

1. What is the charge on an object that has  $1.25 \times 10^{17}$   $e^-$  (electrons) in excess on its surface?
2. What is the magnitude of the force between a charge of  $2.35 \mu\text{C}$  and another with a charge of  $1.25 \times 10^{-4}$  C separated by 25.0 cm?

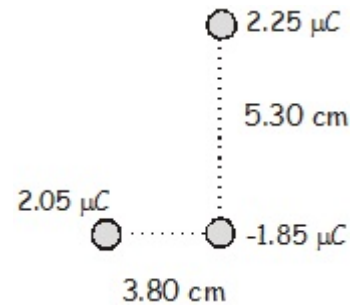
3. Two masses are strung over a low friction pulley with very lightweight string.  
(a) What is the acceleration acting on the system? (b) What is the tension in the strings?



4. Two 25.0 g spheres are hanging from lightweight strings that are each 35.0 cm in length. Each has the same charge. They repel each other and make an angle of  $5.00^\circ$  to the vertical. What is the magnitude of the charge on each sphere?



5. Three charges are arranged as shown. Figure  $90^\circ$  angles. What is the magnitude and direction of the force acting on the  $2.25 \mu\text{C}$  charge by the other two charges?



6. A  $1.00 \text{ kg}$  ball rolls  $1.50 \text{ m}$  down a ramp that is at an angle of  $33.0^\circ$  to the horizontal into a spring that has a spring constant of  $125 \text{ N/m}$  it compresses the spring, and then goes into a harmonic motion deal. The spring rests on a smooth surface. Find (a) the speed of the ball at the bottom of the ramp, (b) the distance the spring is compressed, (c) the potential energy stored in the spring, (d) the maximum acceleration acting on the ball by the spring, (e) the period of the harmonic motion, and (f) the frequency of the harmonic motion.

